



Read Book Online &
Download eBook For Free

ENGLISH

Law Of Sines Discovering Geometry Practice Skills

Any contents and devices in one platform
We are serve HTML 5 cloud eReader directly to your web browser.

FOR THE GUARANTEE TERMS & CONDITIONS,
PLEASE REFER TO INNER PAGE OF BACK COVER.



MF166102481

Worksheet by Kuta Software LLC. Geometry B. Name _____ . Law of Sines ::
The Ambiguous Case. State the number of 3. Geometry. Benchmark 1 Chapters 1 and 2. 9. Draw two rays whose
Is it possible for three planes to intersect in just a single point? Answers will vary. llhn9fliHn3iXtuev
QAElygJeWb9rzac V2x.U. Worksheet by Kuta Software LLC . Laws of Sines and Cosines. Find each
measurement indicated. Round your . Dec 13, 2011 - The Geometer's Sketchpad and Key Curriculum Press are
registered how to use the activities, and provide answers or possible [...]




Read Book Online:

Law Of Sines Discovering Geometry Practice Skills


Download ebook *Law Of Sines Discovering Geometry Practice Skills* in pdf / kindle / epub format also available for any devices anywhere.

Related Book To Law Of Sines Discovering Geometry Practice Skills




[Geometry Practice Book Grades 7 8](#)

Geometry Practice Book Grades 7 8 is wrote by Barbara R. Sandall, Ed.D.. Release on 2008-09-02 by Carson-Dellosa Publishing, this book has 128 page count that consist of useful information with easy reading structure. The book is one of best juvenile nonfiction book, you can find Geometry Practice Book Grades 7 8 book with ISBN 9781580377522.




[Geometry Practice Workbook With Examples](#)

Geometry Practice Workbook With Examples is wrote by MCDUGAL LITTEL. Release on 2000-05-18 by MCDUGAL LITTEL, this book has 256 page count that consist of constructive information with easy reading structure. The book is one of best education & reference book, you can find Geometry Practice Workbook With Examples book with ISBN 9780618020874.




[Power Practice Geometry Gr 5 8 Ebook](#)

Power Practice Geometry Gr 5 8 Ebook is wrote by Andrew Schorr. Release on 2004-0-01 by Creative Teaching Press, this book has 128 page count that include important information with easy reading structure. The book is one of best education book, you can find Power Practice Geometry Gr 5 8 Ebook book with ISBN 9781591989165.




[Cliffsnotes Geometry Practice Pack](#)

Cliffsnotes Geometry Practice Pack is wrote by David Alan Herzog. Release on 2010-0-12 by John Wiley & Sons, this book has 264 page count that include important information with easy reading experience. The book is one of best mathematics book, you can find Cliffsnotes Geometry Practice Pack book with ISBN 9780470488690.




[Practice Makes Perfect Geometry](#)

Practice Makes Perfect Geometry is written by Carolyn Wheeler. Released on 2010-07-08 by McGraw Hill Professional, this book has 160 pages of valuable information with an easy reading experience. The book is one of the best study aid books; you can find Practice Makes Perfect Geometry with ISBN 9780071638135.




[Geometry Music Counterpoint Extended Practice](#)

Geometry Music Counterpoint Extended Practice is written by Dmitri Tymoczko. Released on 2011-03-21 by Oxford University Press, this book has 480 pages that include important information with an easy reading structure. The book is one of the best arts & photography books; you can find Geometry Music Counterpoint Extended Practice with ISBN 9780195336672.




[Geometry Practice Workbook Additional Mathematics](#)

Geometry Practice Workbook Additional Mathematics is written by Prentice Hall. Released on 2002-09-01 by Prentice Hall, this book has 78 pages that enclose constructive information with a lovely reading experience. The book is one of the best education & reference books; you can find Geometry Practice Workbook Additional Mathematics with ISBN 9780130634092.




[Holt McDougal Larson Geometry Practice](#)

Holt McDougal Larson Geometry Practice is written by McDougal Littell. Released on 2006-05-08 by McDougal Littell, this book has 256 pages that attach essential information with an easy reading structure. The book is one of the best education & reference books; you can find Holt McDougal Larson Geometry Practice with ISBN 9780618736959.




[Geometry Workbook Mathematics Learning Practice](#)

Geometry Workbook Mathematics Learning Practice is written by Mel Friedman. Released on 2008-09-22 by Research & Education Association, this book has 312 pages of useful information with an easy reading experience. The book is one of the best science & math books; you can find Geometry Workbook Mathematics Learning Practice with ISBN 9780738604534.



[Practice Makes Perfect Geometry McGraw Hill](#)

Practice Makes Perfect Geometry McGraw Hill is written by Carolyn Wheeler. Released on 2010-07-08 by McGraw-Hill, this book has 160 pages that consist of constructive information with a lovely reading experience. The book is one of the best books; you can find Practice Makes Perfect Geometry McGraw Hill with ISBN 9780071638142.




[**A Geometry Of Music Harmony And Counterpoint In The Extended Common Practice**](#)

A Geometry Of Music Harmony And Counterpoint In The Extended Common Practice is written by Dmitri Tymoczko. Released on 2011-02-21 by Oxford University Press, this book has a 480-page count that consists of valuable information with an easy reading structure. The book is one of the best music books; you can find A Geometry Of Music Harmony And Counterpoint In The Extended Common Practice book with ISBN 9780199714353.



[**Community Practice Skills**](#)

Community Practice Skills is written by Dorothy N. Gamble. Released in 2010 by Columbia University Press, this book has a 482-page count that encloses constructive information with an easy reading structure. The book is one of the best social science books; you can find Community Practice Skills book with ISBN 9780231110037.




[**Writing Skills In Practice**](#)

Writing Skills In Practice is written by Diana Williams. Released in 2002 by Jessica Kingsley Publishers, this book has a 321-page count that unfolds important information with an easy reading structure. The book is one of the best medical books; you can find Writing Skills In Practice book with ISBN 9781853026492.



[**Communication Skills In Practice**](#)

Communication Skills In Practice is written by Diana Williams. Released in 1997-01 by Jessica Kingsley Publishers, this book has a 382-page count that attaches essential information with a lovely reading experience. The book is one of the best health & fitness books; you can find Communication Skills In Practice book with ISBN 9781853022326.



[**Ib Skills Practice French B**](#)

Ib Skills Practice French B is written by Ann Abrioux. Released on 2012-01-13 by Oxford University Press, this book has a 208-page count that unfolds useful information with an easy reading experience. The book is one of the best reference books; you can find Ib Skills Practice French B book with ISBN 9780199127375.

[**Geometry B Law of Sines The Ambiguous Case.ia2 Mr**](#)

Worksheet by Kuta Software LLC. Geometry B. Name _____ . Law of Sines :: The Ambiguous Case. State the number of

[**Geometry beginning skills practice and keys**](#)

3. Geometry. Benchmark 1 Chapters 1 and 2. 9. Draw two rays whose Is it possible for three planes to intersect in just a single point? Answers will vary.

[Honors Geometry Laws of Sines and Cosines Mr. Frambes](#)

Ilhn9fliHn3iXtuev QAElygJeWb9rzac V2x.U. Worksheet by Kuta Software LLC . Laws of Sines and Cosines. Find each measurement indicated. Round your .

[Discovering Geometry](#)

Dec 13, 2011 - The Geometer's Sketchpad and Key Curriculum Press are registered how to use the activities, and provide answers or possible outcomes. . other Discovering Geometry Teacher Resources, including the following. . included is a Logic Lesso

[DISCOVERING GEOMETRY](#)

DISCOVERING GEOMETRY. Assignment Sheet. 12.1/12.2/CHAPTER 11. DATE ASSIGNED: March 23: 1) CHAPTER 10 TEST. 2) Textbook UYAS #10, pg 568,

[Discovering Geometry download](#)

First, to all the teachers who have used Discovering Geometry, a sincere thank you Investigation: The Volume Formula for Prisms and Cylinders Answers for Chapter Reviews . through Developing Proof group activities and exercises.

[Discovering Geometry mottersheadmath](#)

for Parents as part of the Teaching Resources package for the book, the right to reproduce material for use in his Solutions to Chapter 0 Review Exercises . . probably received a copy of Discovering Geometry: Practice Your Skills. You can.

[Discovering Geometry solutions](#)

3 35. 17.7. LESSON 10.1 The Geometry of Solids. 1. oblique. 2. the axis Discovering Geometry Practice Your Skills. ANSWERS. 109. 2003 Key Curriculum .

[Discovering Geometry An Investigative Approach](#)

Discovering Geometry Practice Your Skills. ANSWERS For Exercises 610, 12, and 13, answers may vary. Possible . For Exercises 17, answers will vary.

[Discovering Geometry Through Problem-Solving](#)

Title: Discovering Geometry Through Problem-Solving Launch Pass out the 1-centimeter grid paper to each student. Explain that in order to . Student Application Pass out the Quilt Confusion worksheet and have them work with their .

[Learning To Teach With Discovering Geometry](#)

Then discuss your answers within your group, and revise your answers based on in the chapter focus on visualization skills, both in translating descriptions into . The first exercise illustrates the strategy used in Discovering Geometry that . (The exerc

[Discovering Geometry An Investigative Approach](#)

Discovering Geometry Assessment Resources. ANSWERS. 243. 2008 Key Curriculum Press. CHAPTER 7 Quiz 2. Form B. 1. True. 2. False. 3. False. 4. True.

[CONJECTURES Discovering Geometry Chapter 2 C-1](#)

CONJECTURES - Discovering Geometry. Chapter 2. C-1 Linear Pair Conjecture - If two angles form a linear pair, then the measures of the angles add up to.

[Discovering Geometry An Investigative Approach SunnyMath](#)

Discovering Geometry Assessment Resources. LESSONS 6.1, 6.2 Chapter 6 Quiz 2. Form B. Name. Period. Date. 1. b _____. 2. PA RE c _____. 3. d _____ .

[Tracing Proof in Discovering Geometry If-you-give-a](#)

registered trademarks and trademarks in this book are the property of their Discovering Geometry, in its first edition, was an innovator in addressing students'.

[Discovering Geometry Chapters 8 Homework Guide Mrs](#)

Page 1. Discovering Geometry. Chapters 8 Homework Guide 1-13, 17, 18, 20-23. Study For Quiz over 8.4-8.6. Quiz over. 8.4-8.6 &. 8.7 p. 466. 1-10, 15, 17.

[Discovering Geometry Third Edition List of Conjectures](#)

Bill Towne. Discovering Geometry Teaching and Worksheet Masters. Southwest High School. Discovering Geometry 3rd ed <http://>.

[Discovering Geometry Resources for Parents, Mentors](#)

and who has received Discovering Geometry: An Investigative Approach, A Guide 13 12 11 10 09 08 07 06 Solutions to Chapter 11 Review Exercises .

[Discovering Math: Geometry Discovery Education](#)

Discovering Math: Geometry From geometric shapes to spatial language to creating Explain that a scavenger hunt is a game where they are given a list of.

[Discovering Geometry Oakleaf High School](#)

be made in writing to: Key Curriculum Press, P.O. Box 2304, Berkeley, California 94702. Michael Serra has written a genuinely exciting geometry book.

[DISCOVERING GEOMETRY Washburn High School](#)

concentrates mostly on the Geometry and Measurement strand of the standards. What To Have Click on Third Edition under the Discovering. Geometry book.

[Discovering Geometry An Investigative Approach VAQIO](#)

Discovering Geometry Assessment Resources. ANSWERS. 243 CHAPTER 7 Quiz 2. Form B. 1. True. 2. False. 3. False. 4. True. 5. False. 6. a. b. (x, y) (x.

[Discovering Geometry Southwest High School](#)

A Note to Students from the Author. Michael Serra. What Makes Discovering Geometry Different? Discovering Geometry was designed so that you can be

[Discovering Geometry 2nd Semester Final Exam Reference](#)

Discovering Geometry. 2nd Semester Final Exam Reference Sheet. Circle. $C = d$ or $2r$. $A = r^2$. Regular Polygon. $A = aP$ or asn . Parallelogram. $A = bh$. Prisms.

[Discovering Geometry Final Exam Reference Sheet](#)

Discovering Geometry. Final Exam Reference Sheet. Circle. $C = d$ or $2r$. $A = r^2$. Rectangular Solid. Surface Area = $2lw + 2lh + 2wh$. $V = BH$. Parallelogram. $A = bh$.

[Discovering Geometry An Investigative Approach Home Link](#)

24. possible solution: prism. 25. approximately 1.89 m. 26. 12 62. Salt crystal r r r. 116 ANSWERS TO EXERCISES. Answers to Exercises. Information about
